

**Q - 1. Rewrite the sentences given below in the past tense ( add 'ed' or 'd' to the verbs )**

- The team members play well.
- The pupils listen carefully to the teacher.
- I use the bell for a very special purpose.
- The swimmers drive into the pool.

**Q -2. Fill in the blanks with the correct verbs given in the box.**

[ read , visit , count , buy , shine , see ]

- I \_\_\_\_\_ my friend on holidays.
- Can you \_\_\_\_\_ the birds.
- I have to \_\_\_\_\_ some medicines.
- \_\_\_\_\_ the banana on the table.
- \_\_\_\_\_ what is in the book ?
- Stars \_\_\_\_\_ in the sky.

**Q - 3. Match the following phrases.**

- A swarm of
- A bunch of
- A bundle of
- A jar of
- A pair of
- A bottle of

- shoes
- cookies
- bees
- sticks
- milk
- grapes

**Q - 4. Complete these words using 'ne' or 'en'.**

- bo \_\_\_\_\_
- pho \_\_\_\_\_
- gold \_\_\_\_\_
- b \_\_\_\_\_ d
- fri \_\_\_\_\_ d

**Q - 5. Tick the correct answer.**

- Bina \_\_\_\_\_ the dress. She had no money.  
[a]. couldn't buys [b]. couldn't buy [c]. could buys [d]. could buy
- Grandma and Grandpa \_\_\_\_\_ dinner together.  
[a]. couldn't have [b]. could have [c]. could had [d]. couldn't had
- I \_\_\_\_\_ under this small table when I was two years old.  
[a]. could hide [b]. could have hid [c]. couldn't hid [d]. could had hide

**Q - 6. Imagine , you are king Krishnadev Raya. Write a letter to another king telling him how clever****Tenalirama , your court - poet , is. Ypu may use the suggestion given on box paragraph.**

[ court part , gold coins , courtiers , condition , face , market , did not buy anything , Tenalirama , new clothes , saw face in coin , courtiers very jealous , Tenalirama , happy. ]

Address

\_\_\_\_\_

\_\_\_\_\_

Date \_\_\_\_\_

Dear Friend

\_\_\_\_\_

\_\_\_\_\_

\_\_\_\_\_

your friend.

Krishnadev Raya.



**Q - 1. Answer in one word.**

1. Write the name of animal that can walk
2. Which animals live in burrow.
3. What can you do without water ?
4. Which animals walk in straight line.
5. What is father's father known as ?
6. Which is our first school ?
7. Write the name of two vegetables.
8. Which two birds came to the squirrels party ?
9. Write the two festivals name .
10. Where is a steam engine used ?

---

---

---

---

---

---

---

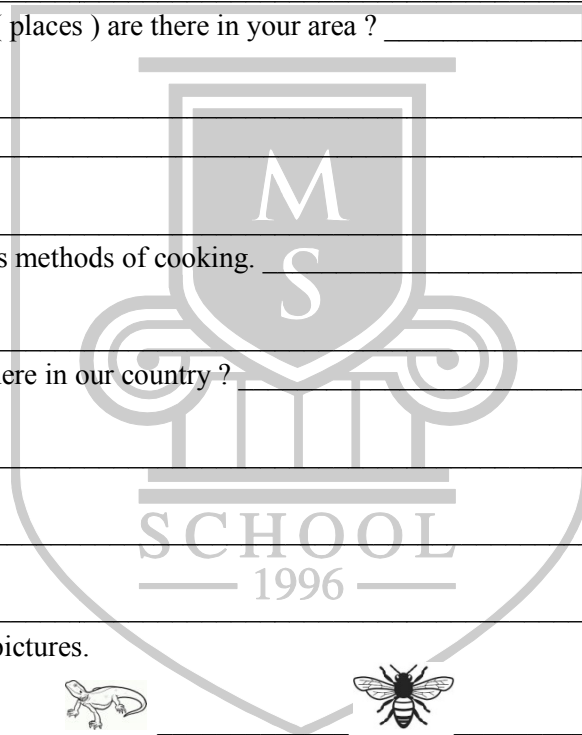
---

---

---

**Q - 2. Short question answer.(Any five)**

1. How many type of transport ?
2. Which public properties ( places ) are there in your area ?
3. What is a joint family ?
4. Write the name of various methods of cooking.
5. How many seasons are there in our country ?
6. Write the name of grains.



7. Write the name of these pictures.



**Q - 3. Long answer question.**

1. Difference between bad habit and good habit. OR State the benefits of eating food.

2. Write the name of five birds and state the food each eats. OR How do birds make use of their beaks.

3. State the use of plant and leaves.

4. Draw the family tree and write the five points about your family.



## Q - 1. Match the following.

A

1. Alexander . G . Bell
2. Jaipur
3. 5th September
4. Gangaur
5. Flamenco
6. Akshardham
7. kiwi
8. Cricket
9. Aeroplane
10. kutch

B

- [a]. A flightless bird
- [b]. Ground.
- [c]. Western most part of India.
- [d]. Pink - city
- [e]. Rajasthan
- [f]. A world famous dance from.
- [g]. Wright Brothers
- [h]. Teacher's Day
- [i]. Telephone
- [j]. A beautifully lit structure in Delhi.

## Q - 2. Answer in one word.

1. It bores hole into three with help of its strong beak.
2. Bird used to carry messages in a ancient time.
3. The smallest planet.
4. The third largest planet.
5. What starts with "t" ends with "t" and has "t" in it ?
6. What can you catch but not throw.
7. It is the fastest aquatic animal.
8. It can see more colours than humans.
9. It is the largest river island in India.
10. It is southern most point of India.
11. It is northern most part of India.
12. It swallows water and becomes too big for other form.
13. What kind of coat can be put on only when wet ?
14. What is broken every time when someone speaks ?
15. Inventor of Television.
16. Inventor of stethoscope
17. Our national anthem.
18. Our national song.
19. Our national animal.
20. Our national flower.

## Q - 3. Write the name ( spellings ) of these picture.





પ્રશ્ન:1. નીચેના દરેક શબ્દનો ઉપયોગ કરી વાક્ય બનાવો.

1. સિંહ = \_\_\_\_\_
2. પંજો = \_\_\_\_\_
3. ઊંઘ = \_\_\_\_\_
4. ઉંદર = \_\_\_\_\_
5. ગણેશજી = \_\_\_\_\_
6. જંગલ = \_\_\_\_\_

પ્રશ્ન:2. નીચેના પ્રશ્નોના ઉત્તર એક વાક્યમાં લખો.

1. સિંહ ક્યાં ફસાયો હતો. \_\_\_\_\_
2. આપણે વારંવાર કોને નમીએ છીએ ? \_\_\_\_\_
3. કાર્તિકેય અને ગણેશ કોના દીકરા હતા ? \_\_\_\_\_
4. નાના-મોટા તારા કોની આસપાસ રમે છે ? \_\_\_\_\_
5. ખેતરમાં સૌથી વધુ મહેનત કોણે કરી ? \_\_\_\_\_
6. કાકા શું લાવે છે ? \_\_\_\_\_

પ્રશ્ન:3. નીચેના પ્રશ્નોના ઉત્તર બે - ત્રણ વાક્યોમાં લખો.

1. લુચ્ચો કાગડો કાબરને શો જવાબ આપે છે ? \_\_\_\_\_
2. ગણેશ અને કાર્તિકેયમાં કોની બુદ્ધી અજબ લાગી ? \_\_\_\_\_
3. વીજળીના ચમકારા કેમ ગમે છે ? ક્યારે ? \_\_\_\_\_

પ્રશ્ન:4. નીચેની કાવ્યપંક્તિ પૂર્ણ કરો.

મને આભલે ચમકતો \_\_\_\_\_ મારો પડછાયો , રમે . મને.

પ્રશ્ન:5. નીચેના કોઈ પણ એક વિષય પર નિબંધ લખો.

ગાય 1996 અથવા મેળો



प्रश्न:1. दिए गए वाक्यों में ✓ या X का निशान लगाइए।

1. दो बच्चे खिलौनेवाले को घेरकर खड़े थे।
3. हमें अपने घर को साफ़ - सुथरा रखना चाहिए।
5. स्नेहा के पिताजी उसकी माँ को लेकर अस्पताल गए थे।

2. अध्यापक ने वल्लभ को शाबाशी दी।
4. एक दिन वल्लभ दोस्तों के साथ बाजार जा रहा था।

प्रश्न:2. निचे दिए गए आवाजों को समझकर मिलान कीजिए।

1. टर् - टर्
2. ची - ची
3. भो - भो
4. काँव - काँव
5. भिन्न - भिन्न

- कुता  
मेढक  
चिड़ियाँ  
मक्खी  
कौआ

प्रश्न:3. अनेक शब्दों के लिए एक शब्द लिखो।

1. इलाज करने वाला ( डॉक्टर / सोनी )
2. कपड़े धोने वाला ( धोबी / मोची )
3. विद्यालय में पढ़ने वाला ( पुजारी / अध्यापक )

प्रश्न:4. शब्दों के अर्थ लिखिए।

1. उत्सव =
2. रोशनी =

प्रश्न:5. अति लघु प्रश्नोत्तर

1. रमन के सपने में कौन आया ?
2. स्नेहा को किसकी आवाज सुनाई दी ?
3. जंगल के जानवरों ने सियार को क्या बना दिया ?
4. " वल्लभ " आगे चलकर किस नाम से मशहूर हुआ ?
5. हमें किसकी पाबंदी सीखनी चाहिए ?

प्रश्न:6. लघु प्रश्नोत्तर .

1. " समय से " कविता से आपने क्या सिखा ?
2. ढक्कन वाला कूड़ेदान क्यों इस्तेमाल करना चाहिए ?
3. स्वरा ने पटाखे खरीदने से क्यों माना किया ?
4. अध्यापक ने साडी घटना सुनकर वल्लभ से क्या कहा ?
5. आप सच्चा दोस्त किसे कहेंगे ?

प्रश्न:7. दिए गए चित्र को देखकर पाँच वाक्य लिखिए।



प्रश्न:8. किसी एक पर निबंध लिखिए। मेरे प्रिय मित्र अथवा दिवाली



Q -1. arrange in ascending order.

- 4986 , 3842 , 2184 , 5026
- 3864 , 1989 , 2120 , 6002

Q - 2. Encircle the even and underline the odd number.

- 3218 , 9879
- 7076 , 1243

Q - 3. Solve the following.

$$\begin{array}{r} \text{H} \quad \text{T} \quad \text{O} \\ 4 \quad 0 \quad 7 \\ + 3 \quad 4 \quad 2 \\ \hline \end{array}$$

$$\begin{array}{r} \text{H} \quad \text{T} \quad \text{O} \\ 3 \quad 8 \quad 6 \\ + \quad \quad 4 \\ \hline \end{array}$$

Q - 4. 243 men , 178 women and 358 children visited a zoo on Sunday. find the total numbers of visitors.

Q - 5. fill in the boxes.

- $21 + 1 =$  \_\_\_\_\_
- $84 + 0 =$  \_\_\_\_\_

- $76 +$  \_\_\_\_\_  $= 76$
- $54 +$  \_\_\_\_\_  $= 55$

Q - 6. arrange in the correct columns and find the sum.

- $2653 + 344 + 2359$
- $35 + 6241 + 2304$

Q - 7. subtract the following.

$$\begin{array}{r} \text{H} \quad \text{T} \quad \text{O} \\ 3 \quad 2 \quad 3 \\ - \quad 7 \quad 6 \\ \hline \end{array}$$

$$\begin{array}{r} \text{H} \quad \text{T} \quad \text{O} \\ 8 \quad 9 \quad 3 \\ - \quad 6 \quad 2 \\ \hline \end{array}$$

Q - 8. fill in the boxes with the appropriate sign.( < , > , or = )

- $127 - 34$  \_\_\_\_\_  $211 - 12$
- $997 - 50$  \_\_\_\_\_  $998 - 82$

Q - 9. write vertically and subtract the following.

- $6745 - 5793$
- $899 - 799$

Q - 10. Estimate the difference by rounding off the given numbers to the nearest 10.

- $358 - 124$  \_\_\_\_\_  $=$  \_\_\_\_\_
- $424 - 118$  \_\_\_\_\_  $=$  \_\_\_\_\_

Q - 11. write the product using multiplication tables.

- $8 \times 5 =$  \_\_\_\_\_
- $10 \times 2 =$  \_\_\_\_\_
- $4 \times 5 =$  \_\_\_\_\_
- $3 \times 4 =$  \_\_\_\_\_

**Q - 12. find the product.**

1. H T O

$$\begin{array}{r} 1 \quad 1 \quad 2 \\ \times \quad \quad 2 \\ \hline \end{array}$$

2. H T O

$$\begin{array}{r} 1 \quad 4 \quad 3 \\ \times \quad 1 \quad 2 \\ \hline \end{array}$$

**Q - 13. find the product.**

1.  $9 \times 200 =$  \_\_\_\_\_

2.  $15 \times 300 =$  \_\_\_\_\_

**Q - 14. Solve.**

1.  $63 \div$  \_\_\_\_\_  $= 63$

2.  $172 \div 172 =$  \_\_\_\_\_

**Q - 15. divide the following**


1.  $2\sqrt{28}$

2.  $3\sqrt{96}$

**Q - 16. find the quotient and the remainder in the following division problems.**

1.  $8\sqrt{73}$

2.  $3\sqrt{22}$



Worksheet -2

Date : 25-04-2020

Subject : Maths


Standard : 3-A



# M.S. SCHOOL

KG TO 12 (English / Gujarati Medium)

📍 5 - Krishna Nagar, Jamnagar - 6. ☎ 0288-2566 916 | 9377 566 916





**Q -1. Write 'T' for true and 'F' for false statements.**

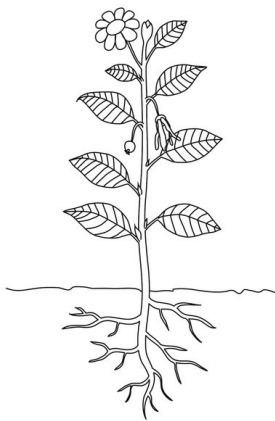
1. We should not play on the road.
2. It is not dangerous to play with fire.
3. Use a blade to sharpen the pencil.
4. Loamy soil is good for plant growth.
5. Soil is home to many animals.

**Q -2. Very short answer questions.**

1. Form a food chain with the following : tiger , plant , deer. \_\_\_\_\_
2. Name a erbivore. \_\_\_\_\_
3. Name any two things that must be kept in a first-aid box. \_\_\_\_\_
4. What do we call the people who move around from place to place? \_\_\_\_\_
5. Name a disease spreading insects found in our houses. \_\_\_\_\_
6. What does soil contain ? \_\_\_\_\_
7. Name the animal that loosen the soil. \_\_\_\_\_
8. Name any two animals that give birth to young ones. \_\_\_\_\_
9. Name any two living things. \_\_\_\_\_
10. Name two stems that we eat. \_\_\_\_\_

**Q -3. Short answer question.**

1. Why do we need food ? \_\_\_\_\_
2. List any two safety rules to be followed in the classroom. \_\_\_\_\_
3. Why do we wear clothes ? \_\_\_\_\_
5. What is reproduction ? \_\_\_\_\_

**Q -4. (a) Lable the diagram of plant****(b) Classify the things.**

[book , man , butterfly , house , mountain , sparrow ]

Living thing : \_\_\_\_\_

Non living things : \_\_\_\_\_

**Q -5. Long answer question.**

1. How can we avoid accidents at home ? write any four ways.
2. What is germination ? Draw a diagram showing germination